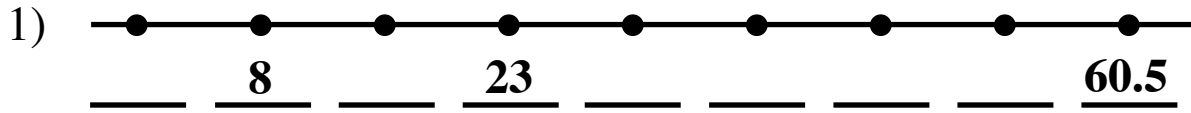
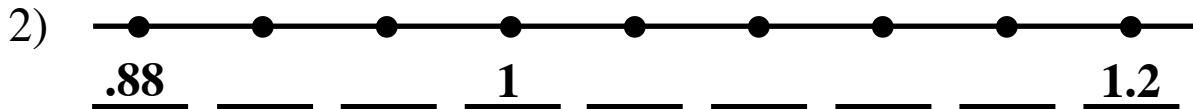


Decimal Sequence #2

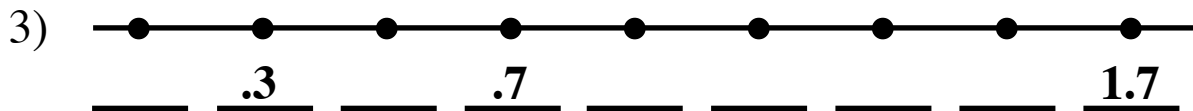
Name each point on the line with a decimal.



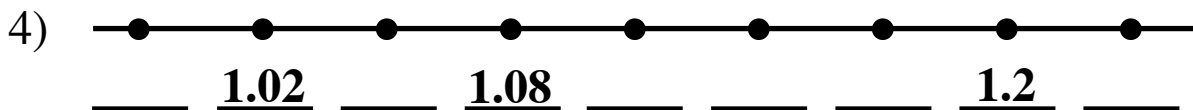
$\Delta =$ _____ Decimal word name = _____



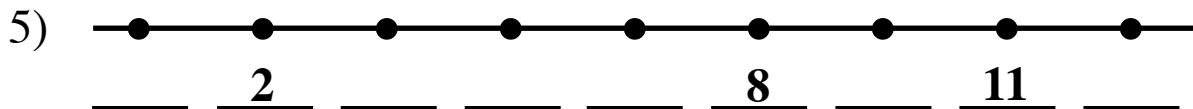
$\Delta =$ _____ Decimal word name = _____



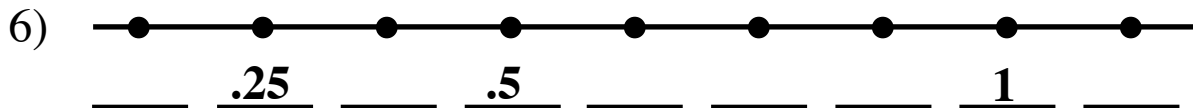
$\Delta =$ _____ Decimal word name = _____



$\Delta =$ _____ Decimal word name = _____



$\Delta =$ _____ Decimal word name = _____



$\Delta =$ _____ Decimal word name = _____